

## Combined Graduate Level Examination-2019 (Tier-I)

Roll Number	
Candidate Name	
Venue Name	
Exam Date	04/03/2020
Exam Time	4:00 PM - 5:00 PM
Subject	CGLE Tier I

Section : General Intelligence and Reasoning

**Q.1** Select the number that can replace the question mark (?) in the following series.

1537, 1539, 1543, ?, 1557, 1567

Ans  1. 1549

 2. 1546

 3. 1553

 4. 1550

Question ID : 314360113

Status : Answered

Chosen Option : 1

**Q.2** Select the option that depicts how the given transparent sheet of paper would appear if it is folded at the dotted line.



Ans


 1.



 2.



 3.



 4.



Question ID : 314360125

Status : Answered

Chosen Option : 1

**Q.3** A product was marked for sale with a label price, which is at 20% discount on the printed price. At the time of sale, the shopkeeper gave an additional 10% discount on the label price. If a customer bought the product at ₹468, then what is the printed price of the product?

- Ans**
- ☒ 1. ₹650
  - ☐ 2. ₹700
  - ☐ 3. ₹600
  - ☐ 4. ₹520

Question ID : **314360119**  
Status : **Answered**  
Chosen Option : **2**

**Q.4** Select the letter-cluster that can replace the question mark (?) in the following series.  
DAG, FCI, ?, JGM, LIO

- Ans**
- ☒ 1. HEK
  - ☐ 2. HKE
  - ☐ 3. IFL
  - ☐ 4. GDJ

Question ID : **314360110**  
Status : **Answered**  
Chosen Option : **1**

**Q.5** Select the option in which the given figure is embedded (rotation is not allowed).



**Ans**

- ☒ 1.
- ☐ 2.
- ☐ 3.
- ☐ 4.

Question ID : **314360123**  
Status : **Answered**  
Chosen Option : **1**

**Q.6** In a certain code language, 'JUPITER' is written as 'JVOJSFR'. How will 'NEPTUNE' be written as in that language?

- Ans ☒ 1. NFOUTOE  
☒ 2. NDPSVME  
☒ 3. NGOUTOE  
☒ 4. NFOSTOE

Question ID : 314360108

Status : Answered

Chosen Option : 1

**Q.7** Four letter-clusters have been given, out of which three are alike in some manner and one is different. Select the odd letter-cluster.

- Ans ☒ 1. IJN  
☒ 2. MNR  
☒ 3. FGL  
☒ 4. ABF

Question ID : 314360104

Status : Answered

Chosen Option : 3

**Q.8** 'Wheat' is related to 'Bread' in the same way as 'Sugarcane' is related to '\_\_\_\_\_':

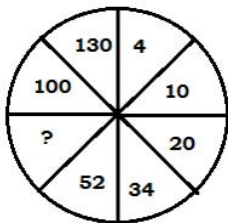
- Ans ☒ 1. Grass  
☒ 2. Mayonnaise  
☒ 3. Ketchup  
☒ 4. Jaggery

Question ID : 314360106

Status : Answered

Chosen Option : 4

**Q.9** Study the given pattern carefully and select the number that can replace the question mark (?) in it.



- Ans ☒ 1. 74  
☒ 2. 64  
☒ 3. 96  
☒ 4. 82

Question ID : 314360117

Status : Answered

Chosen Option : 1

Q.10 Select the letter that can replace the question mark (?) in the following series.

A, E, J, ?, W

Ans ☒ 1. R

☒ 2. Q

☒ 3. P

☒ 4. S

Question ID : 314360102

Status : Answered

Chosen Option : 3

Q.11  $A + B$  means 'A is the wife of B';

$A - B$  means 'B is the daughter of A';

$A \times B$  means 'B is the brother of A';

$A \div B$  means 'A is the father of B'.

If,  $P + R \times T - Q + S \div U$ , then how is P related to the mother of U?

Ans ☒ 1. Aunt

☒ 2. Mother

☒ 3. Maternal grandmother

☒ 4. Paternal grandmother

Question ID : 314360111

Status : Answered

Chosen Option : 3

Q.12 Three different positions of the same dice are shown. Select the symbol that will be on the face opposite to the one showing '+' = '.



Ans ☒ 1. #

☒ 2. S

☒ 3. \*

☒ 4. %

Question ID : 314360122

Status : Answered

Chosen Option : 2

**Q.13** Four words have been given, out of which three are alike in some manner and one is different. Select the odd word.

- Ans** ☒ 1. Chennai  
☒ 2. Aurangabad  
☒ 3. Gangtok  
☒ 4. Hyderabad

Question ID : 314360105

Status : Answered

Chosen Option : 2

**Q.14** Select the option that is related to the third term in the same way as the second term is related to the first term and sixth term is related to fifth term.

72 : 14 :: 87 : ? :: 96 : 54

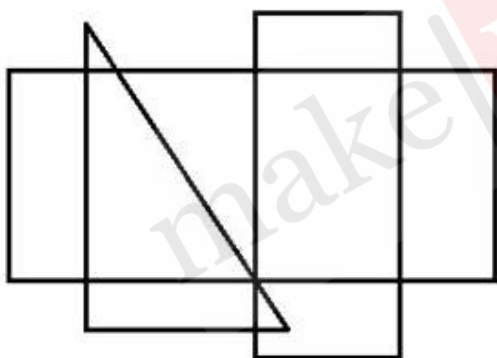
- Ans** ☒ 1. 56  
☒ 2. 52  
☒ 3. 29  
☒ 4. 15

Question ID : 314360114

Status : Answered

Chosen Option : 1

**Q.15** How many rectangles are there in the given figure?



- Ans** ☒ 1. 13  
☒ 2. 15  
☒ 3. 17  
☒ 4. 11

Question ID : 314360121

Status : Answered

Chosen Option : 1

**Q.16** Select the option in which the words share the same relationship as that shared by the given pair of words.

Dentist : Doctor

- Ans**
- ☒ 1. Biology : Astrology
  - ☒ 2. Line : Circle
  - ☒ 3. Algebra : Geometry
  - ☒ 4. Chemistry : Science

Question ID : 314360107

Status : Answered

Chosen Option : 4

**Q.17** Select the correct mirror image of the given figure when a mirror is placed on the right side of the figure.



**Ans**

- ☒ 1.
- ☒ 2.
- ☒ 3.
- ☒ 4.

Question ID : 314360124

Status : Answered

Chosen Option : 4

**Q.18** Four number-pairs have been given, out of which three are alike in some manner and one is different. Select the number-pair that is different.

- Ans**
- ☒ 1. 11 : 146
  - ☒ 2. 17 : 290
  - ☒ 3. 14 : 227
  - ☒ 4. 10 : 123

Question ID : 314360115

Status : Answered

Chosen Option : 3

**Q.19** In a certain code language, 'EARTH' is coded as '8201815'. How will 'ORBIT' be coded as in that language?

- Ans**
- ☒ 1. 37681026
  - ☒ 2. 20921815
  - ☒ 3. 18172372
  - ☒ 4. 17113912

Question ID : **314360109**

Status : **Answered**

Chosen Option : **2**

**Q.20** Read the given statement(s) and conclusions carefully. Assuming that the information given in the statements is true, even if it appears to be at variance with commonly known facts, decide which of the given conclusions logically follow(s) from the statement(s).

**Statements:**

All singers are dancers.

No dancer is a plumber.

**Conclusions:**

I. No plumber is a singer.

II. Some singers are plumbers.

III. Some dancers are singers.

- Ans**
- ☒ 1. Only conclusion II follows.
  - ☒ 2. Only conclusion I follows.
  - ☒ 3. Only conclusions II and III follow.
  - ☒ 4. Only conclusions I and III follow.

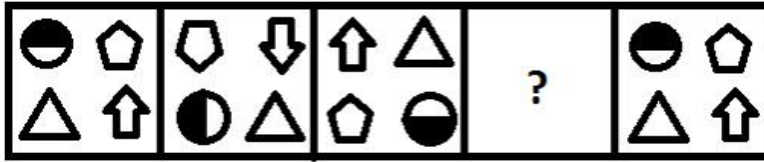
Question ID : **314360112**

Status : **Answered**

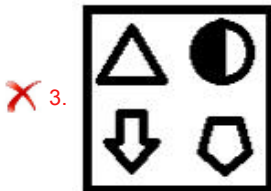
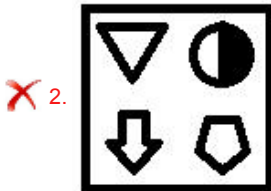
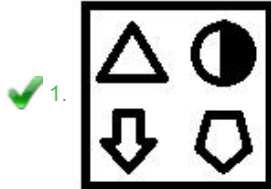
Chosen Option : **4**



Q.21 Select the figure that can replace the question mark (?) in the following series.



Ans



Question ID : 314360120

Status : Answered

Chosen Option : 1

Q.22 Arrange the following words in a logical and meaningful order (according to population).

1. Andhra Pradesh
2. Madhya Pradesh
3. Arunachal Pradesh
4. Uttar Pradesh
5. Himachal Pradesh

Ans ✗ 1. 4-1-2-5-3

✗ 2. 4-2-1-3-5

✓ 3. 4-2-1-5-3

✗ 4. 4-1-2-3-5

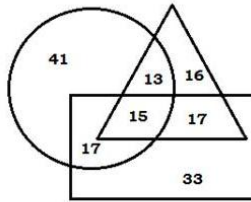
Question ID : 314360103

Status : Answered

Chosen Option : 1



**Q.23** In the given Venn diagram, the 'rectangle' represents 'engineers', the 'circle' represents 'managers', and the 'triangle' represents 'married'. The numbers given in the diagram represent the number of persons in that particular category.



How many people are married but are NOT engineers?

- Ans** ☒ 1. 29  
☒ 2. 13  
☒ 3. 16  
☒ 4. 70

Question ID : 314360126

Status : Answered

Chosen Option : 1

**Q.24** Which two signs should be interchanged to make the given equation correct?

$$121 + 11 - 42 \times 6 \div 7 = 83$$

- Ans** ☒ 1. + and ÷  
☒ 2. ÷ and ×  
☒ 3. - and ÷  
☒ 4. × and -

Question ID : 314360118

Status : Answered

Chosen Option : 2

**Q.25** Select the option in which the number set shares the same relationship as that shared by the given number set.

(17, 24, 45)

- Ans** ☒ 1. (12, 19, 40)  
☒ 2. (18, 23, 46)  
☒ 3. (15, 20, 43)  
☒ 4. (19, 26, 34)

Question ID : 314360116

Status : Answered

Chosen Option : 1

Section : General Awareness

**Q.1** Name the company that has acquired an online travel portal Yatra Online Inc., for an enterprise value of \$337.8 million, in an all-stock transaction.

- Ans
- ☒ 1. Trivago
  - ☒ 2. Ebix Inc.
  - ☒ 3. Trip Advisor
  - ☒ 4. Make my trip.com

Question ID : 314360130  
Status : Answered  
Chosen Option : 1

**Q.2** Who is the only scientist in the world to have won the Nobel prize in Chemistry twice?

- Ans
- ☒ 1. Madame Curie
  - ☒ 2. Roger D. Kornberg
  - ☒ 3. Linus Carl Pauling
  - ☒ 4. Frederick Sanger

Question ID : 314360133  
Status : Not Answered  
Chosen Option : --

**Q.3** Only one Indian batsman has scored a triple century in test cricket other than Virender Sehwag. Name this batsman.

- Ans
- ☒ 1. Rohit Sharma
  - ☒ 2. Karun Nair
  - ☒ 3. Ajinkya Rahane
  - ☒ 4. Shikhar Dhawan

Question ID : 314360148  
Status : Answered  
Chosen Option : 2

**Q.4** Former union minister and former Karnataka CM, D.V. Sadananda Gowda is a cabinet minister in the current central cabinet (February-2020). What is his portfolio?

- Ans
- ☒ 1. Tribal Affairs
  - ☒ 2. Law and Justice
  - ☒ 3. Public Distribution
  - ☒ 4. Chemicals and Fertilizers

Question ID : 314360145  
Status : Not Answered  
Chosen Option : --

**Q.5** When does the entire earth experience equal days and nights?

- Ans
- ☒ 1. Day of summer solstice
  - ☒ 2. At orbital plane
  - ☒ 3. Day of equinox
  - ☒ 4. Day of winter solstice

Question ID : 314360136

Status : Answered

Chosen Option : 3

**Q.6** Who is the author of the delightful and anecdotal history of Indian cricket titled - 'A Corner of a Foreign Field: The Indian History of a British Sport'?

- Ans
- ☒ 1. Ramachandra Guha
  - ☒ 2. Romila Thapar
  - ☒ 3. Sanjay Singh
  - ☒ 4. Bipin Chandra

Question ID : 314360142

Status : Not Answered

Chosen Option : --

**Q.7** Which of the following is an INCORRECT sequence of Mughal rulers?

- Ans
- ☒ 1. Akbar, Jahangir, Shah Jahan
  - ☒ 2. Babur, Humayun, Akbar
  - ☒ 3. Akbar, Shah Jahan, Jahangir
  - ☒ 4. Jahangir, Shah Jahan, Aurangzeb

Question ID : 314360139

Status : Answered

Chosen Option : 3

**Q.8** Bhavai and Kalbelia as traditional dance forms, owe their genesis to which Indian state?

- Ans
- ☒ 1. Assam
  - ☒ 2. Rajasthan
  - ☒ 3. Punjab
  - ☒ 4. Odisha

Question ID : 314360128

Status : Answered

Chosen Option : 4

**Q.9 The 3rd Khelo India Youth Games 2020 is hosted by which Indian state?**

- Ans
- ☒ 1. Kerala
  - ☒ 2. Punjab
  - ☒ 3. Karnataka
  - ☒ 4. Assam

Question ID : **314360147**

Status : **Not Answered**

Chosen Option : --

**Q.10 Who among the following is the current (January 2020) Governor of Kerala?**

- Ans
- ☒ 1. Satya Pal Mallik
  - ☒ 2. Lalji Tandon
  - ☒ 3. Arif Mohammed Khan
  - ☒ 4. B.D. Mishra

Question ID : **314360146**

Status : **Answered**

Chosen Option : 1

**Q.11 The recently revoked 'Article 370' is associated with which of these states of India?**

- Ans
- ☒ 1. Sikkim
  - ☒ 2. Nagaland
  - ☒ 3. Assam
  - ☒ 4. Kashmir

Question ID : **314360149**

Status : **Answered**

Chosen Option : 4

**Q.12 Four multi-storied illegal constructions - Jain Coral Cove, H2O Holy Faith, Alfa Serene and Golden Kayaloram - were razed to the ground in January 2020 following Supreme Court instructions. In which state did this happen?**

- Ans
- ☒ 1. Kerala
  - ☒ 2. Karnataka
  - ☒ 3. Tamil Nadu
  - ☒ 4. Goa

Question ID : **314360151**

Status : **Not Answered**

Chosen Option : --

**Q.13 Iranian Major General Qasem Soleimani was recently (2020) assassinated by the US military in \_\_\_\_\_.**

- Ans**
- ☒ 1. Saudi Arabia
  - ☒ 2. Pakistan
  - ☒ 3. Iraq
  - ☒ 4. United Arab Emirates

Question ID : 314360150

Status : **Answered**

Chosen Option : 1

**Q.14 Name the author of the 2019 released book - 'The Scent of God'.**

- Ans**
- ☒ 1. Nayantara Sehgal
  - ☒ 2. Saikat Majumdar
  - ☒ 3. Githa Hariharan
  - ☒ 4. Himanjali Sankar

Question ID : 314360144

Status : **Not Answered**

Chosen Option : --

**Q.15 Name the two Indian actors who shared the National Best Actor Award (Male) in the 66th National Film Awards 2019.**

- Ans**
- ☒ 1. Ayushmann Khurrana and Vicky Kaushal
  - ☒ 2. Nana Patekar and Mohanlal
  - ☒ 3. Ranbir Kapoor and Akshay Kumar
  - ☒ 4. Amitabh Bachchan and Ranbir Kapoor

Question ID : 314360127

Status : **Answered**

Chosen Option : 1

**Q.16 What is the name of the phenomena in physics and astronomy which involves the splitting of a spectral line into two or more components of slightly different frequency when the light source is placed in a magnetic field?**

- Ans**
- ☒ 1. Zeeman Effect
  - ☒ 2. Raman Effect
  - ☒ 3. Lumen Effect
  - ☒ 4. Alpenglow Effect

Question ID : 314360135

Status : **Answered**

Chosen Option : 1

Q.17 Which of the following is an Indian Research Station in the Antarctica Region?

- Ans
- ☒ 1. Orcadas
  - ☒ 2. Maitri
  - ☒ 3. Hope Bay
  - ☒ 4. Mawson

Question ID : 314360138  
Status : Answered  
Chosen Option : 3

Q.18 From which of the following states does 2019 Padma Vibhushan winner, Teejan Bai hail?

- Ans
- ☒ 1. Telangana
  - ☒ 2. Chhattisgarh
  - ☒ 3. Odisha
  - ☒ 4. Gujarat

Question ID : 314360143  
Status : Not Answered  
Chosen Option : --

Q.19 Who among the following is known as the 'father of Muslim renaissance' in Bengal?

- Ans
- ☒ 1. Sir Sayed Ahmed Khan
  - ☒ 2. Nawab Abdul Latif Khan
  - ☒ 3. Ameer Ali
  - ☒ 4. Nawab Salimullah Khan

Question ID : 314360140  
Status : Not Answered  
Chosen Option : --

Q.20 The American scientist Edwin Hubble's name is associated with which of these theories?

- Ans
- ☒ 1. Quantum Chromodynamics Theory
  - ☒ 2. The Big Bang Theory
  - ☒ 3. Partial Coherence of Light Theory
  - ☒ 4. Lattice Gauge Theory

Question ID : 314360131  
Status : Not Answered  
Chosen Option : --

**Q.21** How many members did the International Monetary Fund (IMF) have as of January 2020?

- Ans
- ☐ 1. 164
  - ☐ 2. 174
  - ☐ 3. 182
  - ☒ 4. 189

Question ID : 314360129

Status : Not Answered

Chosen Option : --

**Q.22** What is the name of the phenomena (driven by the scattering of light) in which mountain tops acquire a rosy or orange hue around sunrise and sunset?

- Ans
- ☐ 1. Brillouin scattering
  - ☐ 2. Barrel distortion
  - ☒ 3. Alpenglow
  - ☐ 4. Circle of confusion

Question ID : 314360134

Status : Not Answered

Chosen Option : --

**Q.23** Which of these is the energy conversion that happens in the process called photosynthesis?

- Ans
- ☐ 1. Heat energy to chemical energy
  - ☒ 2. Light energy to chemical energy
  - ☐ 3. Heat energy to light energy
  - ☐ 4. Potential energy to chemical energy

Question ID : 314360132

Status : Answered

Chosen Option : 2

**Q.24** Who was the then Governor-General of British India, when 'Sati Pratha' became illegal and punishable?

- Ans
- ☐ 1. Warren Hastings
  - ☒ 2. Lord William Bentinck
  - ☐ 3. Lord Wellesley
  - ☐ 4. Lord Cornwallis

Question ID : 314360141

Status : Answered

Chosen Option : 2



**Q.25** The city of Vijayawada lies on the banks of which of these rivers?

- Ans
- ☐ 1. Godavari
  - ☐ 2. Mahanadi
  - ☐ 3. Tapti
  - ☒ 4. Krishna

Question ID : 314360137

Status : Answered

Chosen Option : 1

Section : Quantitative Aptitude

**Q.1** If the selling price of an article is 8% more than the cost price and the discount offered is 10% on the marked price of the article, then what is the ratio of the cost price to the marked price?

- Ans
- ☐ 1. 8 : 9
  - ☒ 2. 5 : 6
  - ☐ 3. 3 : 4
  - ☐ 4. 4 : 5

Question ID : 314360154

Status : Answered

Chosen Option : 2

**Q.2** In  $\triangle ABC$ ,  $\angle B = 72^\circ$  and  $\angle C = 44^\circ$ . Side BC is produced to D. The bisectors of  $\angle B$  and  $\angle ACD$  meet at E. What is the measure of  $\angle BEC$ ?

- Ans
- ☒ 1.  $32^\circ$
  - ☐ 2.  $36^\circ$
  - ☐ 3.  $46^\circ$
  - ☐ 4.  $58^\circ$

Question ID : 314360169

Status : Answered

Chosen Option : 1

- Q.3** The given table represents the production of different types of motorcycles (in thousands) over a period of six years. Study the table carefully and answer the question that follows.

Years → Motorcycles (type) ↓	2013	2014	2015	2016	2017	2018
A	95	84	85	89	80	98
B	98	87	89	88	96	92
C	104	89	95	92	100	110
D	103	100	102	95	104	120

What is the percentage increase in the total production of all types of motorcycles from 2014 to 2018?

Ans

☒ 1.  $14\frac{3}{7}$

☒ 2.  $16\frac{2}{3}$

☒ 3.  $14\frac{2}{7}$

☒ 4.  $17\frac{1}{3}$

Question ID : 314360175

Status : Not Answered

Chosen Option : --

- Q.4** The given table represents the production of different types of motorcycles (in thousands) over a period of six years. Study the table carefully and answer the question that follows.

Years → Motorcycles (type) ↓	2013	2014	2015	2016	2017	2018
A	95	84	85	89	80	98
B	98	87	89	88	96	92
C	104	89	95	92	100	110
D	103	100	102	95	104	120

What is the ratio of the total number of motorcycles of type B produced in 2016 and 2018 to the total number of motorcycles of type D produced in 2013, 2015 and 2016?

Ans

☒ 1. 3 : 5

☒ 2. 1 : 2

☒ 3. 2 : 3

☒ 4. 3 : 4

Question ID : 314360173

Status : Not Answered

Chosen Option : --

**Q.5** If  $7\cos^2\theta + 3\sin^2\theta = 6$ ,  $0^\circ < \theta < 90^\circ$ , then the value of  $\frac{\cot^2 2\theta + \sec^2 2\theta}{\tan^2 2\theta - \sin^2 2\theta}$  is:

- Ans**
- ☒ 1.  $\frac{26}{15}$
  - ☒ 2.  $\frac{28}{27}$
  - ☒ 3.  $\frac{52}{27}$
  - ☒ 4.  $\frac{49}{45}$

Question ID : 314360170

Status : Answered

Chosen Option : 3

**Q.6** Two circles of radii 7 cm and 5 cm intersect each other at A and B, and the distance between their centres is 10 cm. The length (in cm) of the common chord AB is:

- Ans**
- ☒ 1.  $\frac{2\sqrt{74}}{5}$
  - ☒ 2.  $\frac{3\sqrt{66}}{5}$
  - ☒ 3.  $\frac{4\sqrt{66}}{5}$
  - ☒ 4.  $\frac{3\sqrt{74}}{5}$

Question ID : 314360166

Status : Answered

Chosen Option : 3

**Q.7** A sum of ₹  $x$  was divided between A, B, C and D in the ratio  $\frac{1}{3} : \frac{1}{5} : \frac{1}{6} : \frac{1}{9}$ . If the difference between the shares of B and D is ₹832, then the value of  $x$  is:

- Ans**
- ☒ 1. ₹7,696
  - ☒ 2. ₹7,592
  - ☒ 3. ₹7,488
  - ☒ 4. ₹7,384

Question ID : 314360158

Status : Answered

Chosen Option : 2

**Q.8** The chords AB and CD of a circle intersect at E. If AE = 12 cm, BE = 20.25 cm and CE = 3 DE, then the length (in cm) of CE is:

- Ans**  1. 27  
 2. 25.5  
 3. 28.5  
 4. 18

Question ID : 314360167

Status : Answered

Chosen Option : 1

**Q.9** The given table represents the production of different types of motorcycles (in thousands) over a period of six years. Study the table carefully and answer the question that follows.

Years → Motorcycles (type) ↓	2013	2014	2015	2016	2017	2018
A	95	84	85	89	80	98
B	98	87	89	88	96	92
C	104	89	95	92	100	110
D	103	100	102	95	104	120

By what percentage is the total production of type A motorcycles over six years, less than the total production of all types of motorcycles in 2013 and 2016?

- Ans**  1. 32.8  
 2. 31.6  
 3. 30.5  
 4. 32.2

Question ID : 314360176

Status : Not Answered

Chosen Option : --

**Q.10** A sells an article to B at a loss of 20%, B sells it to C at a profit of 12.5% and C sells it to D at a loss of 8%. If D buys it for ₹248.40, then what is the difference between the loss incurred by A and C?

- Ans**  1. ₹39.20  
 2. ₹36.80  
 3. ₹38.40  
 4. ₹42.60

Question ID : 314360157

Status : Answered

Chosen Option : 3

Q.11 The value of  $\frac{8 \div [(8-3) \div \{(4 \div 4 \text{ of } 8) + 4 - 4 \times 4 \div 8\} - 2]}{8 \times 8 \div 4 - 8 \div 8 \text{ of } 2 - 7}$  is:

- Ans
- ☒ 1.  $\frac{16}{170}$
  - ☒ 2.  $\frac{2}{17}$
  - ☒ 3.  $\frac{17}{8}$
  - ☒ 4.  $\frac{8}{3}$

Question ID : 314360153  
Status : Answered  
Chosen Option : 1

Q.12 How many numbers are there from 200 to 800 which are neither divisible by 5 nor by 7?

- Ans
- ☒ 1. 407
  - ☒ 2. 410
  - ☒ 3. 411
  - ☒ 4. 413

Question ID : 314360152  
Status : Answered  
Chosen Option : 2

Q.13 Places A and B are 144 km apart. Two cars start simultaneously, one from A and the other from B. If they move in the same direction, they meet after 12 hours, but if they move towards each other they meet after  $\frac{9}{8}$  hours. The speed (in km/h) of the car moving at a faster speed, is:

- Ans
- ☒ 1. 70
  - ☒ 2. 72
  - ☒ 3. 60
  - ☒ 4. 64

Question ID : 314360161  
Status : Answered  
Chosen Option : 1

Q.14 If  $2x^2 + y^2 + 8z^2 - 2\sqrt{2}xy + 4\sqrt{2}yz - 8zx = (Ax + y + Bz)^2$ , then the value of  $(A^2 + B^2 - AB)$  is:

- Ans
- ☒ 1. 16
  - ☒ 2. 18
  - ☒ 3. 14
  - ☒ 4. 6

Question ID : 314360163  
Status : Answered  
Chosen Option : 4

**Q.15** The average age of a number of persons in a group was calculated as 35 years, which was 2.5 years more than the correct average as there was an error in recording the age of two persons as 38.5 years and 40 years instead of 29 years and 22 years respectively. The number of persons in the group was:

- Ans**
- ☒ 1. 11
  - ☐ 2. 12
  - ☐ 3. 13
  - ☐ 4. 15

Question ID : 314360155

Status : Answered

Chosen Option : 1

**Q.16** In  $\triangle ABC$ ,  $AC = 8.4$  cm and  $BC = 14$  cm. P is a point on AB such that  $CP = 11.2$  cm and  $\angle ACP = \angle B$ . What is the length (in cm) of BP?

- Ans**
- ☒ 1. 3.78
  - ☐ 2. 3.6
  - ☐ 3. 2.8
  - ☐ 4. 4.12

Question ID : 314360168

Status : Answered

Chosen Option : 1

**Q.17** If  $12x^2 - 21x + 1 = 0$ , then what is the value of  $9x^2 + (16x^2)^{-1}$ ?

- Ans**
- ☐ 1.  $\frac{429}{8}$
  - ☐ 2.  $\frac{465}{16}$
  - ☒ 3.  $\frac{417}{16}$
  - ☐ 4.  $\frac{453}{8}$

Question ID : 314360164

Status : Answered

Chosen Option : 3

**Q.18** The area of a field in the shape of a regular hexagon is  $2400\sqrt{3}$  m<sup>2</sup>. The cost of fencing the field at ₹16.80/metre is:

- Ans**
- ☐ 1. ₹3,024
  - ☐ 2. ₹4,536
  - ☐ 3. ₹3,528
  - ☒ 4. ₹4,032

Question ID : 314360162

Status : Answered

Chosen Option : 4

**Q.19** A, B and C donate 8%, 7% and 9%, of their salaries, respectively to a charitable trust. The salaries of A and B are same and the difference between their donations is ₹259. The total donation of A and B is ₹1,185 more than that of C. The total donation of A and C is what percentage of the total salaries of A, B and C? (Correct to one decimal place)

- Ans**
- ☒ 1. 6.2%
  - ☒ 2. 7.1%
  - ☒ 3. 6.4%
  - ☒ 4. 5.8%

Question ID : 314360156

Status : Not Answered

Chosen Option : --

**Q.20** The given table represents the production of different types of motorcycles (in thousands) over a period of six years. Study the table carefully and answer the question that follows.

Years → Motorcycles (type) ↓	2013	2014	2015	2016	2017	2018
A	95	84	85	89	80	98
B	98	87	89	88	96	92
C	104	89	95	92	100	110
D	103	100	102	95	104	120

During 2015, the production of which type of motorcycle was more than 25% of the total production of all types of motorcycles in 2017?

- Ans**
- ☒ 1. A
  - ☒ 2. C
  - ☒ 3. B
  - ☒ 4. D

Question ID : 314360174

Status : Not Answered

Chosen Option : --

**Q.21** If  $x + y + z = 3$ , and  $x^2 + y^2 + z^2 = 101$ , then what is the value of  $\sqrt{x^3 + y^3 + z^3 - 3xyz}$ ?

- Ans**
- ☒ 1. 21
  - ☒ 2. 28
  - ☒ 3. 19
  - ☒ 4. 24

Question ID : 314360165

Status : Answered

Chosen Option : 1



**Q.22** A sum of ₹8,000 invested at 10% p.a. amounts to ₹9,261 in a certain time, interest compounded half-yearly. What will be the compound interest (in ₹) on the same sum for the same time at double the earlier rate of interest, when interest is compounded annually?

- Ans**
- ☒ 1. ₹2,500
  - ☒ 2. ₹2,560
  - ☒ 3. ₹2,520
  - ☒ 4. ₹2,480

Question ID : 314360159

Status : Not Answered

Chosen Option : --

**Q.23** The value of  $\frac{(\cos 9^\circ + \sin 81^\circ)(\sec 9^\circ + \operatorname{cosec} 81^\circ)}{2 \sin^2 63^\circ + 1 + 2 \sin^2 27^\circ}$  is:

- Ans**
- ☒ 1.  $\frac{4}{3}$
  - ☒ 2. 1
  - ☒ 3.  $\frac{1}{2}$
  - ☒ 4. 2

Question ID : 314360171

Status : Answered

Chosen Option : 1

**Q.24** Four men and 6 women can complete a certain piece of work in 5 days whereas three men and 4 women can complete it in 7 days. How many men should assist 25 women to complete  $2\frac{1}{2}$  times the same work in 5 days?

- Ans**
- ☒ 1. 4
  - ☒ 2. 8
  - ☒ 3. 10
  - ☒ 4. 5

Question ID : 314360160

Status : Answered

Chosen Option : 4

**Q.25** If  $\sec \theta + \tan \theta = p, 0^\circ < \theta < 90^\circ$ , then  $\frac{p^2 - 1}{p^2 + 1}$  is equal to:

- Ans**
- ☒ 1.  $\sin \theta$
  - ☒ 2.  $\cos \theta$
  - ☒ 3.  $\operatorname{cosec} \theta$
  - ☒ 4.  $2 \operatorname{cosec} \theta$

Question ID : 314360172

Status : Answered

Chosen Option : 1

## Section : English Comprehension

**Q.1 Select the INCORRECTLY spelt word.**

- Ans  1. Ignorance  
 2. Itinerent  
 3. Influence  
 4. Impeach

Question ID : 314360200

Status : Answered

Chosen Option : 2

**Q.2 Select the word which means the same as the group of words given.**

One who is preoccupied with his own interests

- Ans  1. Egoist  
 2. Pessimist  
 3. Atheist  
 4. Optimist


Question ID : 314360198

Status : Answered

Chosen Option : 1

**Q.3 Given below are four jumbled sentences. Out of the given options pick the one that gives their correct order.**

- A. Upon returning from his travels, he was forced to live in a house where his large family lived.  
B. Vaikom Muhammad Basheer was a Malayalam fiction writer from Vaikom in Kerala.  
C. The household was always noisy and full of chaos, no place for a writer surely!  
D. Apart from family members, myriads of domestic animals also treated the house as their own.

- Ans  1. BDCA  
 2. BADC  
 3. BCAD  
 4. BCDA

Question ID : 314360190

Status : Answered

Chosen Option : 2

**Q.4** Select the most appropriate option to fill in the blank.

Being a millionaire, he is leading a \_\_\_\_\_ life.

- Ans
- ☒ 1. destitute
  - ☒ 2. luxurious
  - ☒ 3. expensive
  - ☒ 4. conducive

Question ID : 314360201

Status : Answered

Chosen Option : 2

**Q.5** Select the correct passive form of the given sentence.

Did the problems you had to face discourage you?

- Ans
- ☒ 1. Are you discouraged by the problems you had to face?
  - ☒ 2. Have you been discouraged by the problems you have to face?
  - ☒ 3. Are you being discouraged by the problems you had to face?
  - ☒ 4. Were you discouraged by the problems you had to face?

Question ID : 314360179

Status : Answered

Chosen Option : 4

**Q.6** Select the most appropriate ANTONYM of the given word.

Sparse

- Ans
- ☒ 1. Abundant
  - ☒ 2. Costly
  - ☒ 3. Scanty
  - ☒ 4. Tranquil

Question ID : 314360194

Status : Answered

Chosen Option : 1

**Comprehension:**

In the following passage some words have been deleted. Fill in the blanks with the help of the alternatives given. Select the most appropriate option for each blank.

Milton Hershey returned to the village where he had been born, in the heart of dairy country. He opened his chocolate manufacturing plant (1)\_\_\_\_\_ 1905. With access to all the fresh milk he (2)\_\_\_\_\_, he began producing the finest milk chocolate. The plant (3)\_\_\_\_\_ opened in a small Pennsylvania village is today the (4)\_\_\_\_\_ chocolate factory in the world. The confections created here are (5)\_\_\_\_\_ around the world.

**SubQuestion No : 7**

**Q.7** Select the most appropriate option to fill in blank 1.

- Ans
- ☒ 1. to
  - ☒ 2. on
  - ☒ 3. at
  - ☒ 4. in

Question ID : 314360184

Status : Answered

Chosen Option : 4

**Comprehension:**

In the following passage some words have been deleted. Fill in the blanks with the help of the alternatives given. Select the most appropriate option for each blank.

Milton Hershey returned to the village where he had been born, in the heart of dairy country. He opened his chocolate manufacturing plant (1)\_\_\_\_\_ 1905. With access to all the fresh milk he (2)\_\_\_\_\_, he began producing the finest milk chocolate. The plant (3)\_\_\_\_\_ opened in a small Pennsylvania village is today the (4)\_\_\_\_\_ chocolate factory in the world. The confections created here are (5)\_\_\_\_\_ around the world.

**SubQuestion No : 8**

**Q.8** Select the most appropriate option to fill in blank 2.

- Ans
- ☒ 1. considered
  - ☒ 2. distributed
  - ☒ 3. kneaded
  - ☒ 4. needed

Question ID : 314360185

Status : Answered

Chosen Option : 4

**Comprehension:**

In the following passage some words have been deleted. Fill in the blanks with the help of the alternatives given. Select the most appropriate option for each blank.

Milton Hershey returned to the village where he had been born, in the heart of dairy country. He opened his chocolate manufacturing plant (1)\_\_\_\_\_ 1905. With access to all the fresh milk he (2)\_\_\_\_\_, he began producing the finest milk chocolate. The plant (3)\_\_\_\_\_ opened in a small Pennsylvania village is today the (4)\_\_\_\_\_ chocolate factory in the world. The confections created here are (5)\_\_\_\_\_ around the world.

**SubQuestion No : 9**

**Q.9** Select the most appropriate option to fill in blank 3.

- Ans
- ☒ 1. what
  - ☒ 2. that
  - ☐ 3. when
  - ☐ 4. who

Question ID : 314360186

Status : Answered

Chosen Option : 2

**Comprehension:**

In the following passage some words have been deleted. Fill in the blanks with the help of the alternatives given. Select the most appropriate option for each blank.

Milton Hershey returned to the village where he had been born, in the heart of dairy country. He opened his chocolate manufacturing plant (1)\_\_\_\_\_ 1905. With access to all the fresh milk he (2)\_\_\_\_\_, he began producing the finest milk chocolate. The plant (3)\_\_\_\_\_ opened in a small Pennsylvania village is today the (4)\_\_\_\_\_ chocolate factory in the world. The confections created here are (5)\_\_\_\_\_ around the world.

**SubQuestion No : 10**

**Q.10** Select the most appropriate option to fill in blank 4.

- Ans
- ☐ 1. larger
  - ☐ 2. large
  - ☒ 3. largest
  - ☐ 4. most largest

Question ID : 314360187

Status : Answered

Chosen Option : 3

**Comprehension:**

In the following passage some words have been deleted. Fill in the blanks with the help of the alternatives given. Select the most appropriate option for each blank.

Milton Hershey returned to the village where he had been born, in the heart of dairy country. He opened his chocolate manufacturing plant (1)\_\_\_\_\_ 1905. With access to all the fresh milk he (2)\_\_\_\_\_, he began producing the finest milk chocolate. The plant (3)\_\_\_\_\_ opened in a small Pennsylvania village is today the (4)\_\_\_\_\_ chocolate factory in the world. The confections created here are (5)\_\_\_\_\_ around the world.

**SubQuestion No : 11**

**Q.11** Select the most appropriate option to fill in blank 5.

- Ans
- ☒ 1. choices
  - ☒ 2. collections
  - ☒ 3. favourites
  - ☒ 4. selections

Question ID : 314360188

Status : Answered

Chosen Option : 3

**Q.12** In the sentence identify the segment which contains the grammatical error.

I am believing you have submitted all the necessary documents.

- Ans
- ☒ 1. I am believing
  - ☒ 2. you have submitted
  - ☒ 3. all the
  - ☒ 4. necessary documents

Question ID : 314360177

Status : Answered

Chosen Option : 1

**Q.13** Select the most appropriate option to substitute the underlined segment in the given sentence. If there is no need to substitute it, select 'No substitution'.

Your advice will benefit to me.

- Ans
- ☒ 1. benefit me
  - ☒ 2. benefit for me
  - ☒ 3. No substitution
  - ☒ 4. benefit from me

Question ID : 314360181

Status : Answered

Chosen Option : 1

**Q.14 Select the most appropriate meaning of the given idiom.**

**Bring to light**

- Ans
- ☒ 1. Cheer someone
  - ☒ 2. Praise in public
  - ☒ 3. Brighten up
  - ☒ 4. Reveal clearly

Question ID : 314360195

Status : Answered

Chosen Option : 4

**Q.15 In the sentence identify the segment which contains the grammatical error.**

**No sooner did we receive your message when we heaved a sigh of relief.**

- Ans
- ☒ 1. did we receive
  - ☒ 2. when we heaved
  - ☒ 3. your message
  - ☒ 4. a sigh of relief

Question ID : 314360178

Status : Answered

Chosen Option : 2

**Q.16 Select the most appropriate synonym of the given word.**

**Solitary**

- Ans
- ☒ 1. Singular
  - ☒ 2. Sensible
  - ☒ 3. Stubborn
  - ☒ 4. Splendid

Question ID : 314360192

Status : Answered

Chosen Option : 1

**Q.17 Select the most appropriate synonym of the given word.**

**Fury**

- Ans
- ☒ 1. Sin
  - ☒ 2. Crime
  - ☒ 3. Anger
  - ☒ 4. Risk

Question ID : 314360191

Status : Answered

Chosen Option : 3



**Q.18 Select the INCORRECTLY spelt word.**

- Ans ☒ 1. Dilliver  
☒ 2. Denial  
☒ 3. Decision  
☒ 4. Deter

Question ID : **314360199**  
Status : **Answered**  
Chosen Option : **1**

**Q.19 Select the most appropriate option to fill in the blank.**

Children under five years are \_\_\_\_\_ from passport biometrics.

- Ans ☒ 1. exempted  
☒ 2. escaped  
☒ 3. allowed  
☒ 4. acquitted

Question ID : **314360202**  
Status : **Answered**  
Chosen Option : **1**

**Q.20 Select the most appropriate ANTONYM of the given word.**

Friendship

- Ans ☒ 1. Slavery  
☒ 2. Enmity  
☒ 3. Amity  
☒ 4. Arrogance

Question ID : **314360193**  
Status : **Answered**  
Chosen Option : **2**

**Q.21 Select the correct indirect form of the given sentence.**

The lawyer said to me, "There is no proof of your involvement in this case."

- Ans ☒ 1. The lawyer told that there is no proof of my involvement in that case.  
☒ 2. The lawyer told me that there is no proof of your involvement in this case.  
☒ 3. The lawyer told me that there was no proof of my involvement in that case.  
☒ 4. The lawyer said me that there was no proof of my involvement in this case.

Question ID : **314360180**  
Status : **Answered**  
Chosen Option : **3**

Q.22 Given below are four jumbled sentences. Out of the given options pick the one that gives their correct order.

- A. Even the most ill-equipped laboratory would have been better than their shed.
- B. Thus, they did not allow any difficulties to come in their way.
- C. But their mind was set upon the discovery of radium.
- D. The Curies had to work in extreme poverty.

Ans ☒ 1. ADBC  
☒ 2. DACB  
☒ 3. ABCD  
☒ 4. DBCA

Question ID : 314360189

Status : Answered

Chosen Option : 2

Q.23 Select the most appropriate option to substitute the underlined segment in the given sentence. If there is no need to substitute it, select No substitution.

Where you left your bag yesterday?

Ans ☒ 1. Where did you leave  
☒ 2. Where were you leaving  
☒ 3. Where did you left  
☒ 4. No substitution

Question ID : 314360182

Status : Answered

Chosen Option : 1

Q.24 Select the word which means the same as the group of words given.

A geometrical figure with eight sides

Ans ☒ 1. Pentagon  
☒ 2. Hexagon  
☒ 3. Octagon  
☒ 4. Heptagon

Question ID : 314360197

Status : Answered

Chosen Option : 3

Q.25 Select the most appropriate meaning of the given idiom.

Hold water

Ans ☒ 1. To be valid  
☒ 2. To be deep  
☒ 3. To be fickle  
☒ 4. To be busy

Question ID : 314360196

Status : Answered

Chosen Option : 1

make  exam